

**UNIVERSITY COLLEGE TATI (UCTATI)****FINAL EXAMINATION QUESTION BOOKLET**

COURSE CODE	: BMT 3022
COURSE	: SENSOR TECHNOLOGY
SEMESTER/SESSION	: 2-2023/2024
DURATION	: 2 HOURS

Instructions:

1. This booklet contains **4** questions. Answer **ALL** questions.
2. All answers should be written in answer booklet.
3. Write legibly and draw sketches wherever required.
4. If in doubt, raise up your hands and ask the invigilator.

DO NOT OPEN THIS BOOKLET UNTIL YOU ARE TOLD TO DO SO

THIS BOOKLET CONTAINS 8 PRINTED PAGES INCLUDING COVER PAGE

QUESTION 1

- a) Define the meaning of the stimulus. (1 mark)
- b) Transducer may be a part of a complex sensor, for example, a chemical sensor may have a part that converts the energy of a chemical reaction into heat.
- Describe the meaning of transducer. (2 marks)
 - Give an example of the transducer in our daily life. (1 mark)
- c) There are many classifications for sensors that can be classified depending on the type of output signal or the physical parameters. Describe FOUR (4) sensor classifications. (4 marks)
- d) **Figure 1** shows a block diagram for one simple sensor. Describe how the process works.

**Figure 1**

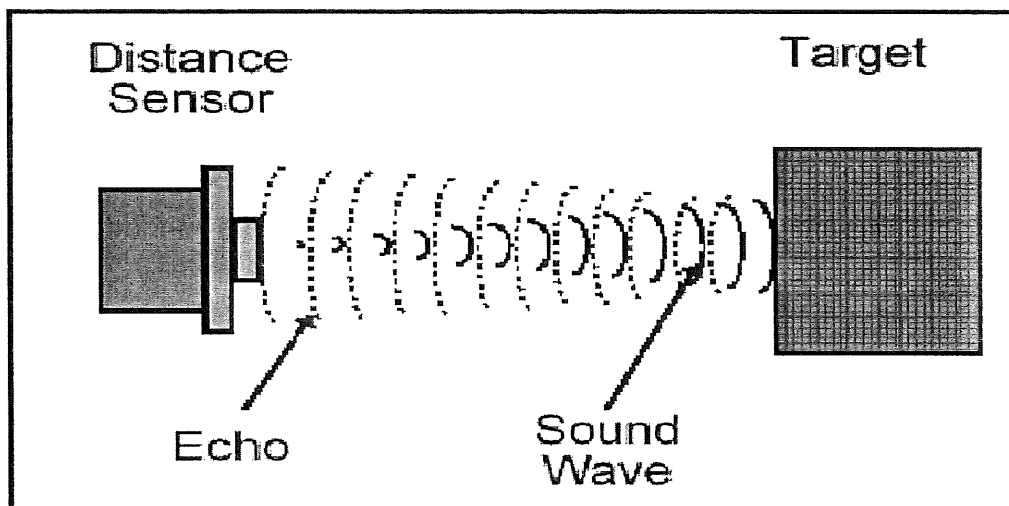
(2 marks)

QUESTION 2

- a) Describe the difference between PTC thermistor and NTC thermistor. (2 marks)
- b) A type S thermocouple with the 28°C reference measures 3.934 mV. Calculate the junction temperature. (Refer to Table for Type S Thermocouple). (9 marks)
- c) A type S thermocouple with a 0°C reference will monitor an oven temperature at about 200°C. Predict the expected voltage. (Refer to Table for Type S Thermocouple). (2 marks)

QUESTION 3

- a) Draw FOUR (4) types of the wire strain gauge (1 mark)
- b) Describe unbonded resistance wire strain gauge and bonded resistance wire strain gauge. (2 marks)
- c) Figure 2 below shows a simple illustration of the ultrasonic sensor. Explain how this ultrasonic sensor works.

**Figure 2**

(2 marks)

- d) Figure 3 below shows the illustration concept of the ultrasonic sensor. Assume, the time to travel from the sensor to the object is 4 seconds.

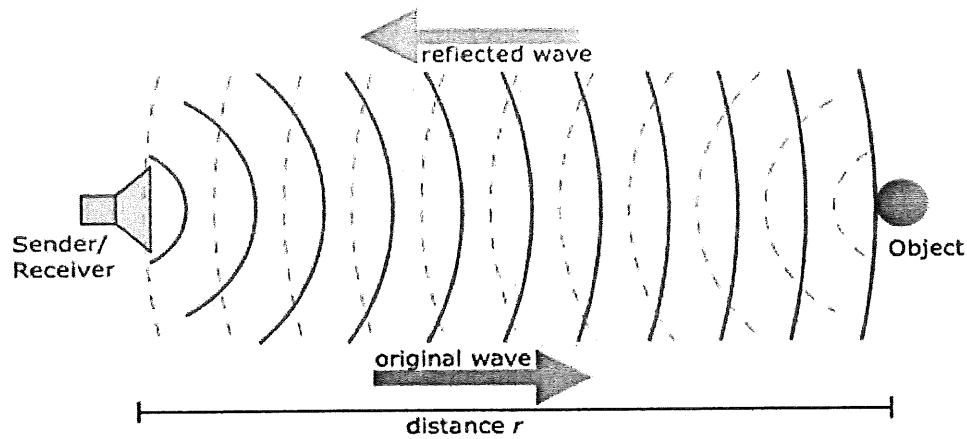


Figure 3

- i. Calculate the distance, r , between the sender/receiver and the object.
(speed of sound at sea level) = 340.29 m/s.
(4 marks)
- ii. Calculate time travel from sender/receiver to object and return to sender/receiver.
(1 mark)

QUESTION 4

- a) Define a Linear Voltage Differential Transformer (LVDT). (1 mark)
- b) Figure 4 shows the basic construction of an LVDT. Refer to **Figure 4**, describe the working principle of an LVDT.

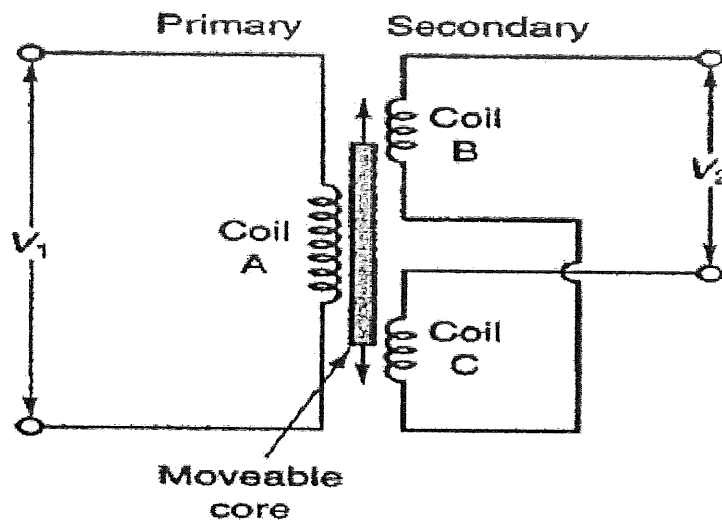


Figure 4

(6 marks)

-----End of question-----

SENSOR TECHNOLOGY (BMT 3022)

Attachment



TABLE 15 Type S Thermocouple — thermoelectric voltage as a function of temperature (°C); reference junctions at 0 °C

°C	0	1	2	3	4	5	6	7	8	9	10	°C
Thermoelectric Voltage in Millivolts												
-50	-0.236											-50
-40	-0.194	-0.199	-0.203	-0.207	-0.211	-0.215	-0.219	-0.224	-0.228	-0.232	-0.236	-40
-30	-0.150	-0.155	-0.159	-0.164	-0.168	-0.173	-0.177	-0.181	-0.186	-0.190	-0.194	-30
-20	-0.103	-0.108	-0.113	-0.117	-0.122	-0.127	-0.132	-0.136	-0.141	-0.146	-0.150	-20
-10	-0.053	-0.058	-0.063	-0.068	-0.073	-0.078	-0.083	-0.088	-0.093	-0.098	-0.103	-10
0	0.000	-0.005	-0.011	-0.016	-0.021	-0.027	-0.032	-0.037	-0.042	-0.048	-0.053	0
0	0.000	0.005	0.011	0.016	0.022	0.027	0.033	0.038	0.044	0.050	0.055	0
10	0.055	0.061	0.067	0.072	0.078	0.084	0.090	0.095	0.101	0.107	0.113	10
20	0.113	0.119	0.125	0.131	0.137	0.143	0.149	0.155	0.161	0.167	0.173	20
30	0.173	0.179	0.185	0.191	0.197	0.204	0.210	0.216	0.222	0.229	0.235	30
40	0.235	0.241	0.248	0.254	0.260	0.267	0.273	0.280	0.286	0.292	0.299	40
50	0.299	0.305	0.312	0.319	0.325	0.332	0.338	0.345	0.352	0.358	0.365	50
60	0.365	0.372	0.378	0.385	0.392	0.399	0.405	0.412	0.419	0.426	0.433	60
70	0.433	0.440	0.446	0.453	0.460	0.467	0.474	0.481	0.488	0.495	0.502	70
80	0.502	0.509	0.516	0.523	0.530	0.538	0.545	0.552	0.559	0.566	0.573	80
90	0.573	0.580	0.588	0.595	0.602	0.609	0.617	0.624	0.631	0.639	0.646	90
100	0.646	0.653	0.661	0.668	0.675	0.683	0.690	0.698	0.705	0.713	0.720	100
110	0.720	0.727	0.735	0.743	0.750	0.758	0.765	0.773	0.780	0.788	0.795	110
120	0.795	0.803	0.811	0.818	0.826	0.834	0.841	0.849	0.857	0.865	0.872	120
130	0.872	0.880	0.888	0.896	0.903	0.911	0.919	0.927	0.935	0.942	0.950	130
140	0.950	0.958	0.966	0.974	0.982	0.990	0.998	1.006	1.013	1.021	1.029	140
150	1.029	1.037	1.045	1.053	1.061	1.069	1.077	1.085	1.094	1.102	1.110	150
160	1.110	1.118	1.126	1.134	1.142	1.150	1.158	1.167	1.175	1.183	1.191	160
170	1.191	1.199	1.207	1.216	1.224	1.232	1.240	1.249	1.257	1.265	1.273	170
180	1.273	1.282	1.290	1.298	1.307	1.315	1.323	1.332	1.340	1.348	1.357	180
190	1.357	1.365	1.373	1.382	1.390	1.399	1.407	1.415	1.424	1.432	1.441	190
200	1.441	1.449	1.458	1.466	1.475	1.483	1.492	1.500	1.509	1.517	1.526	200
210	1.526	1.534	1.543	1.551	1.560	1.569	1.577	1.586	1.594	1.603	1.612	210
220	1.612	1.620	1.629	1.638	1.646	1.655	1.663	1.672	1.681	1.690	1.698	220
230	1.698	1.707	1.716	1.724	1.733	1.742	1.751	1.759	1.768	1.777	1.786	230
240	1.786	1.794	1.803	1.812	1.821	1.829	1.838	1.847	1.856	1.865	1.874	240
250	1.874	1.882	1.891	1.900	1.909	1.918	1.927	1.936	1.944	1.953	1.962	250
260	1.962	1.971	1.980	1.989	1.998	2.007	2.016	2.025	2.034	2.043	2.052	260
270	2.052	2.061	2.070	2.078	2.087	2.096	2.105	2.114	2.123	2.132	2.141	270
280	2.141	2.151	2.160	2.169	2.178	2.187	2.196	2.205	2.214	2.223	2.232	280
290	2.232	2.241	2.250	2.259	2.268	2.277	2.287	2.296	2.305	2.314	2.323	290
300	2.323	2.332	2.341	2.350	2.360	2.369	2.378	2.387	2.396	2.405	2.415	300
310	2.415	2.424	2.433	2.442	2.451	2.461	2.470	2.479	2.488	2.497	2.507	310
320	2.507	2.516	2.525	2.534	2.544	2.553	2.562	2.571	2.581	2.590	2.599	320
330	2.599	2.609	2.618	2.627	2.636	2.646	2.655	2.664	2.674	2.683	2.692	330
340	2.692	2.702	2.711	2.720	2.730	2.739	2.748	2.758	2.767	2.776	2.786	340
350	2.786	2.795	2.805	2.814	2.823	2.833	2.842	2.851	2.861	2.870	2.880	350
360	2.880	2.889	2.899	2.908	2.917	2.927	2.936	2.946	2.955	2.965	2.974	360
370	2.974	2.983	2.993	3.002	3.012	3.021	3.031	3.040	3.050	3.059	3.069	370
380	3.069	3.078	3.088	3.097	3.107	3.116	3.126	3.135	3.145	3.154	3.164	380
390	3.164	3.173	3.183	3.192	3.202	3.212	3.221	3.231	3.240	3.250	3.259	390
°C	0	1	2	3	4	5	6	7	8	9	10	°C

SENSOR TECHNOLOGY (BMT 3022)

S^oC

TABLE 15 Type S Thermocouple — thermoelectric voltage as a function of temperature (°C); reference junctions at 0 °C

°C	0	1	2	3	4	5	6	7	8	9	10	°C
Thermoelectric Voltage in Millivolts												
400	3.259	3.269	3.279	3.288	3.298	3.307	3.317	3.326	3.336	3.346	3.355	400
410	3.355	3.365	3.374	3.384	3.394	3.403	3.413	3.423	3.432	3.442	3.451	410
420	3.451	3.461	3.471	3.480	3.490	3.500	3.509	3.519	3.529	3.538	3.548	420
430	3.548	3.558	3.567	3.577	3.587	3.596	3.606	3.616	3.626	3.635	3.645	430
440	3.645	3.655	3.664	3.674	3.684	3.694	3.703	3.713	3.723	3.732	3.742	440
450	3.742	3.752	3.762	3.771	3.781	3.791	3.801	3.810	3.820	3.830	3.840	450
460	3.840	3.850	3.859	3.869	3.879	3.889	3.898	3.908	3.918	3.928	3.938	460
470	3.938	3.947	3.957	3.967	3.977	3.987	3.997	4.006	4.016	4.026	4.036	470
480	4.036	4.046	4.056	4.065	4.075	4.085	4.095	4.105	4.115	4.125	4.134	480
490	4.134	4.144	4.154	4.164	4.174	4.184	4.194	4.204	4.213	4.223	4.233	490
500	4.233	4.243	4.253	4.263	4.273	4.283	4.293	4.303	4.313	4.323	4.332	500
510	4.332	4.342	4.352	4.362	4.372	4.382	4.392	4.402	4.412	4.422	4.432	510
520	4.432	4.442	4.452	4.462	4.472	4.482	4.492	4.502	4.512	4.522	4.532	520
530	4.532	4.542	4.552	4.562	4.572	4.582	4.592	4.602	4.612	4.622	4.632	530
540	4.632	4.642	4.652	4.662	4.672	4.682	4.692	4.702	4.712	4.722	4.732	540
550	4.732	4.742	4.752	4.762	4.772	4.782	4.793	4.803	4.813	4.823	4.833	550
560	4.833	4.843	4.853	4.863	4.873	4.883	4.893	4.904	4.914	4.924	4.934	560
570	4.934	4.944	4.954	4.964	4.974	4.984	4.995	5.005	5.015	5.025	5.035	570
580	5.035	5.045	5.055	5.066	5.076	5.086	5.096	5.106	5.116	5.127	5.137	580
590	5.137	5.147	5.157	5.167	5.178	5.188	5.198	5.208	5.218	5.228	5.239	590
600	5.239	5.249	5.259	5.269	5.280	5.290	5.300	5.310	5.320	5.331	5.341	600
610	5.341	5.351	5.361	5.372	5.382	5.392	5.402	5.413	5.423	5.433	5.443	610
620	5.443	5.454	5.464	5.474	5.485	5.495	5.505	5.515	5.526	5.536	5.546	620
630	5.546	5.557	5.567	5.577	5.588	5.598	5.608	5.618	5.629	5.639	5.649	630
640	5.649	5.660	5.670	5.680	5.691	5.701	5.712	5.722	5.732	5.743	5.753	640
650	5.753	5.763	5.774	5.784	5.794	5.805	5.815	5.826	5.836	5.846	5.857	650
660	5.857	5.867	5.878	5.888	5.898	5.909	5.919	5.930	5.940	5.950	5.961	660
670	5.961	5.971	5.982	5.992	6.003	6.013	6.024	6.034	6.044	6.055	6.065	670
680	6.065	6.076	6.086	6.097	6.107	6.118	6.128	6.139	6.149	6.160	6.170	680
690	6.170	6.181	6.191	6.202	6.212	6.223	6.233	6.244	6.254	6.265	6.275	690
700	6.275	6.286	6.296	6.307	6.317	6.328	6.338	6.349	6.360	6.370	6.381	700
710	6.381	6.391	6.402	6.412	6.423	6.434	6.444	6.455	6.465	6.476	6.486	710
720	6.486	6.497	6.508	6.518	6.529	6.539	6.550	6.561	6.571	6.582	6.593	720
730	6.593	6.603	6.614	6.624	6.635	6.646	6.656	6.667	6.678	6.688	6.699	730
740	6.699	6.710	6.720	6.731	6.742	6.752	6.763	6.774	6.784	6.795	6.806	740
750	6.806	6.817	6.827	6.838	6.849	6.859	6.870	6.881	6.892	6.902	6.913	750
760	6.913	6.924	6.934	6.945	6.956	6.967	6.977	6.988	6.999	7.010	7.020	760
770	7.020	7.031	7.042	7.053	7.064	7.074	7.085	7.096	7.107	7.117	7.128	770
780	7.128	7.139	7.150	7.161	7.172	7.182	7.193	7.204	7.215	7.226	7.236	780
790	7.236	7.247	7.258	7.269	7.280	7.291	7.302	7.312	7.323	7.334	7.345	790
800	7.345	7.356	7.367	7.378	7.388	7.399	7.410	7.421	7.432	7.443	7.454	800
810	7.454	7.465	7.476	7.487	7.497	7.508	7.519	7.530	7.541	7.552	7.563	810
820	7.563	7.574	7.585	7.596	7.607	7.618	7.629	7.640	7.651	7.662	7.673	820
830	7.673	7.684	7.695	7.706	7.717	7.728	7.739	7.750	7.761	7.772	7.783	830
840	7.783	7.794	7.805	7.816	7.827	7.838	7.849	7.860	7.871	7.882	7.893	840
850	7.893	7.904	7.915	7.926	7.937	7.948	7.959	7.970	7.981	7.992	8.003	850
860	8.003	8.014	8.026	8.037	8.048	8.059	8.070	8.081	8.092	8.103	8.114	860
870	8.114	8.125	8.137	8.148	8.159	8.170	8.181	8.192	8.203	8.214	8.226	870
880	8.226	8.237	8.248	8.259	8.270	8.281	8.293	8.304	8.315	8.326	8.337	880
890	8.337	8.348	8.360	8.371	8.382	8.393	8.404	8.416	8.427	8.438	8.449	890
°C	0	1	2	3	4	5	6	7	8	9	10	°C